












20.1.21

Addition

LO: To use a 10s frame to solve addition number sentences.

Task: Look at the number sentence then solve it by drawing the objects on your 10s frames to find the total.
The first one has been completed for you.

$$5 + 6 = \underline{\quad}$$

$$7 + 5 =$$

$$8 + 6 =$$

$$9 + 7 =$$

