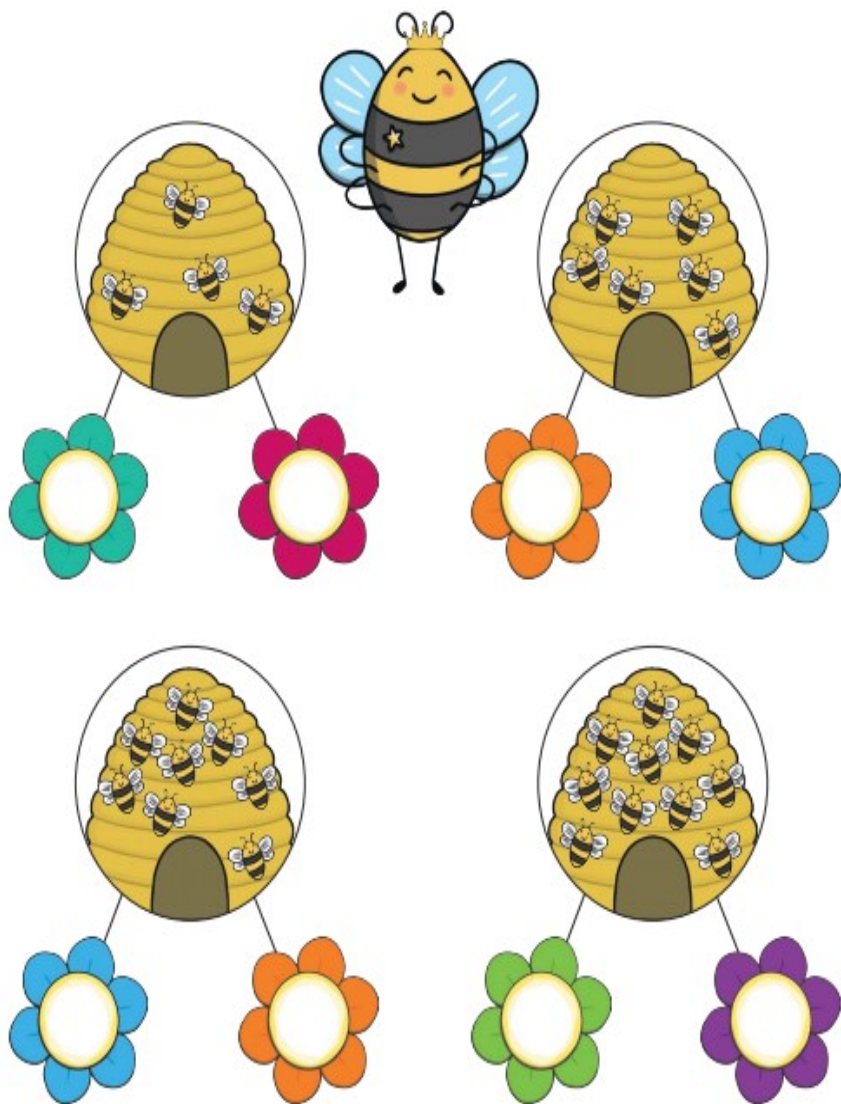


29.1.21.


Measurement.

LO: To solve problems involving halving and doubling.


Can you find half by sharing the bees equally onto the flowers below the bees nest? Draw the bees around the petals then write the number inside the flower.




Can you find double by drawing the same amount of dots on the blank side of the domino then write the answer on the line?




Double 6 is _____.




Double 8 is _____.




Double 10 is _____.



Double 9 is _____.



Double 5 is _____.



Double 7 is _____.

Ask your grown up if they would like to play a game! Here are the instructions for the game:

1. Roll a dice if you have one, if not take it in turns to move forward.
2. Move forward that number of spaces.
3. Answer the double or halving question. If you get it right, move forwards Good luck!

