


3.2.21

Measurement.

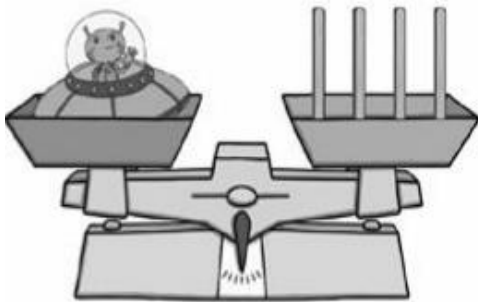
LO: To compare the mass of objects using non standard units.

Task: Look at the pictures of the balanced scales below, count the sticks carefully then decide if the statements are true or false.

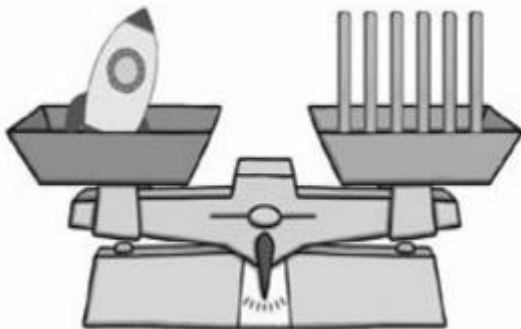


True or false?

The space man weighs more than 5 sticks.



The alien weighs the same as 4 sticks.



The rocket weighs less than 7 sticks.

Now draw your own balanced scales.

