











Maths 10.2.21

Task: Count how much money is in each purse.

To do this, make sure you count on from the largest value.

Separate the coins into pounds and pence. First, write how many pounds you have altogether. Then count how many pence you have altogether and write this down. The pounds and pence sound be separated by a decimal point (which just looks like a full stop) eg £3.70 is three pounds and seventy pence.

When you answer includes pounds, you must write a £ before you write down the total number of pounds. If you have no pounds, and only have pence, make sure you write a 'p' for pence after your answer. The first two have been done as examples for you.

<p>1.</p> <p>50p 20p</p>  <p>How much? 70p</p>	<p>2.</p> <p>10p £1</p>  <p>How much? £1 10</p>
<p>3.</p>  <p>How much? _____</p>	<p>4.</p>  <p>How much? _____</p>
<p>5.</p>  <p>How much? _____</p>	<p>6.</p>  <p>How much? _____</p>
<p>7.</p>  <p>How much? _____</p>	<p>8.</p>  <p>How much? _____</p>
<p>9.</p>  <p>How much? _____</p>	<p>10.</p>  <p>How much? _____</p>