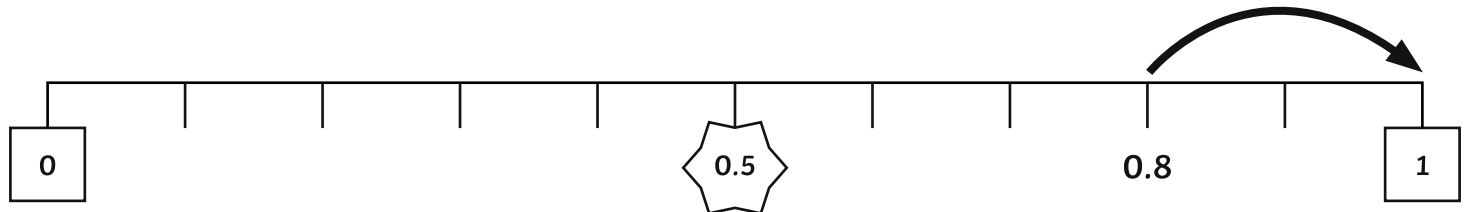





# Rounding Decimals

Complete the rounding number lines to help you to round the numbers to the nearest whole number.

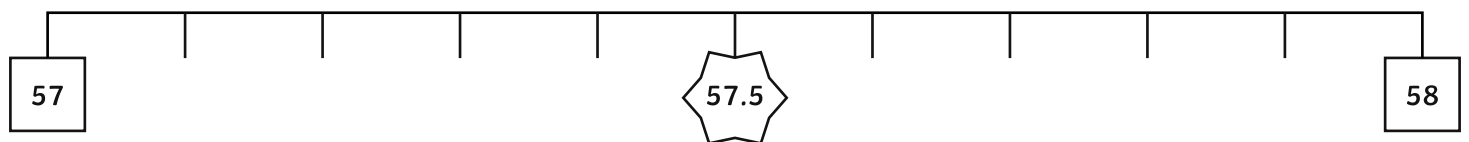
1. 0.8 rounded to the nearest whole number is



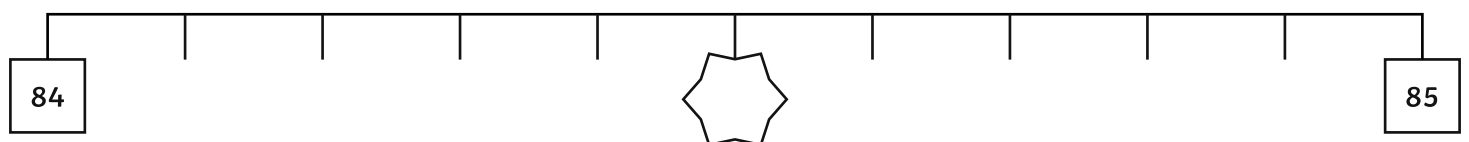
2. 13.6 rounded to the nearest whole number is



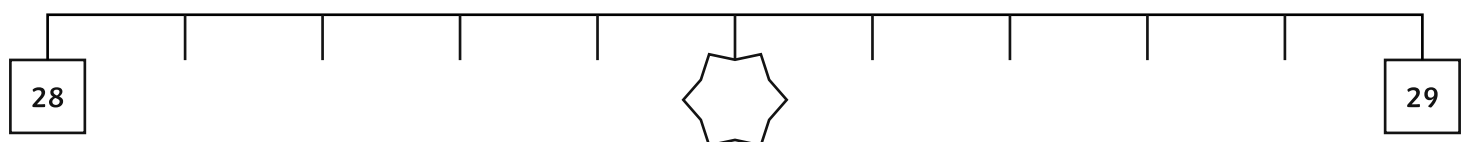
3. 57.2 rounded to the nearest whole number is



4. 84.4 rounded to the nearest whole number is

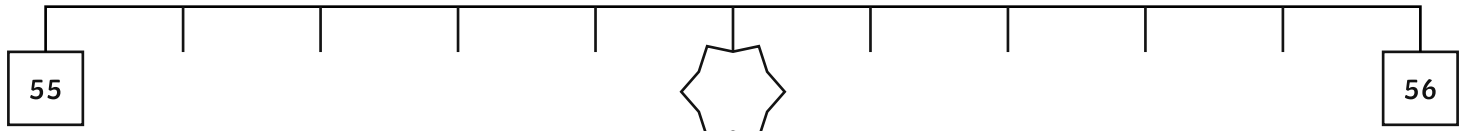


5. 28.1 rounded to the nearest whole number is

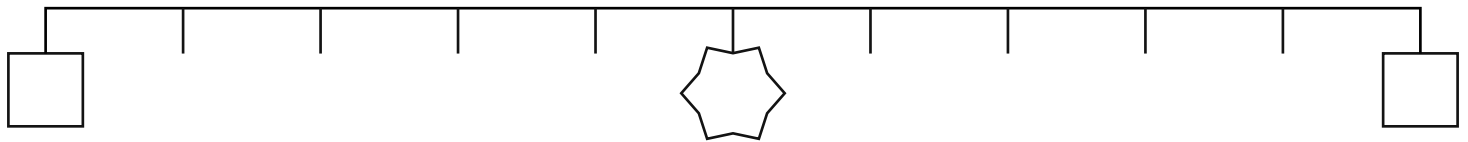




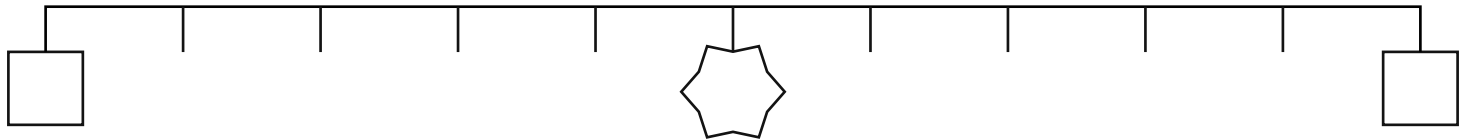
6. 55.5 rounded to the nearest whole number is



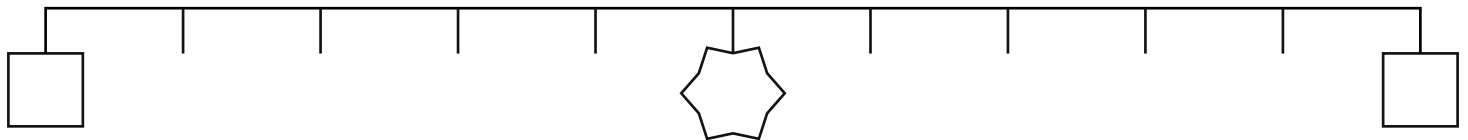
7. 16.3 rounded to the nearest whole number is



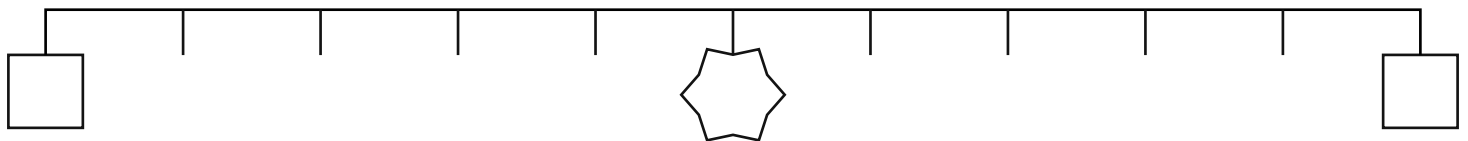
8. 99.7 rounded to the nearest whole number is



9. 50.9 rounded to the nearest whole number is



10. 132.5 rounded to the nearest whole number is





# Rounding Decimals

Draw number lines to help you to round the numbers to the nearest whole number. Use a Rounding Number Line if you need to.

1. 0.8 rounded to the nearest whole number is

---

2. 13.6 rounded to the nearest whole number is

---

3. 57.2 rounded to the nearest whole number is

---

4. 84.4 rounded to the nearest whole number is

---

5. 28.1 rounded to the nearest whole number is

---



6. 55.5 rounded to the nearest whole number is

---

7. 16.3 rounded to the nearest whole number is

---

8. 99.7 rounded to the nearest whole number is

---

9. 50.9 rounded to the nearest whole number is

---

10. 132.5 rounded to the nearest whole number is

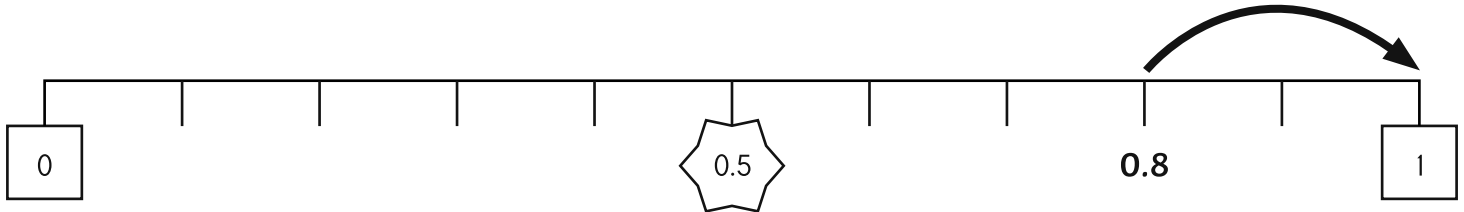
---



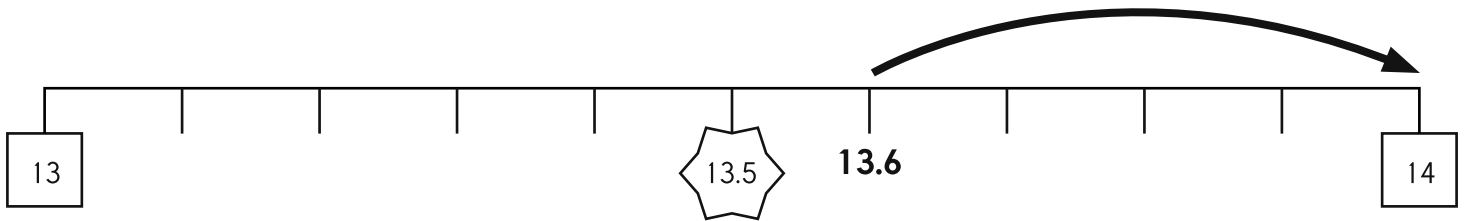
# Rounding Decimals Answers

Complete the rounding number lines to help you to round the numbers to the nearest whole number.

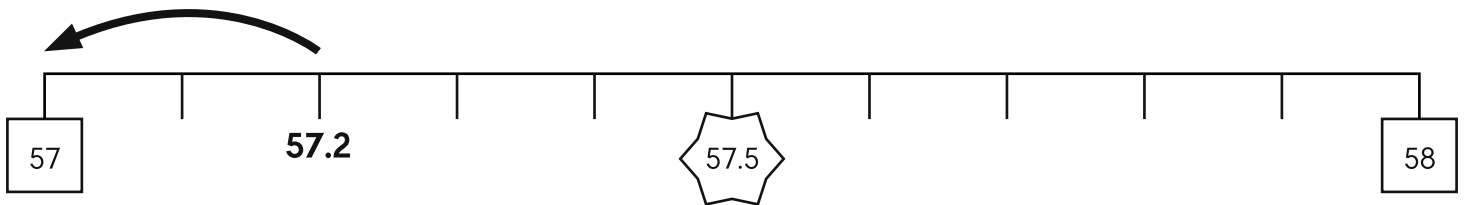
1. 0.8 rounded to the nearest whole number is



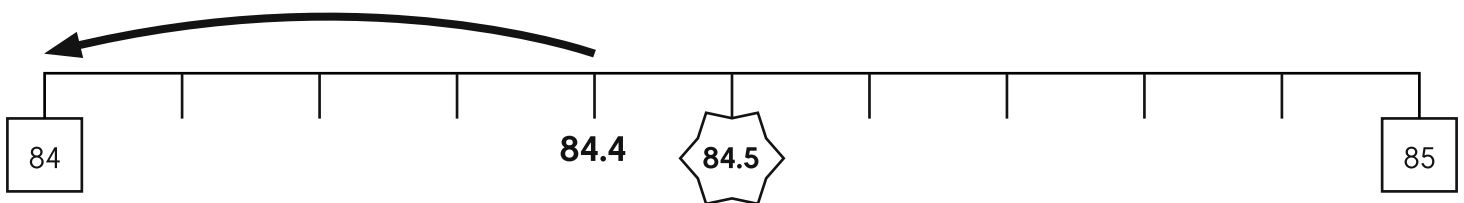
2. 13.6 rounded to the nearest whole number is



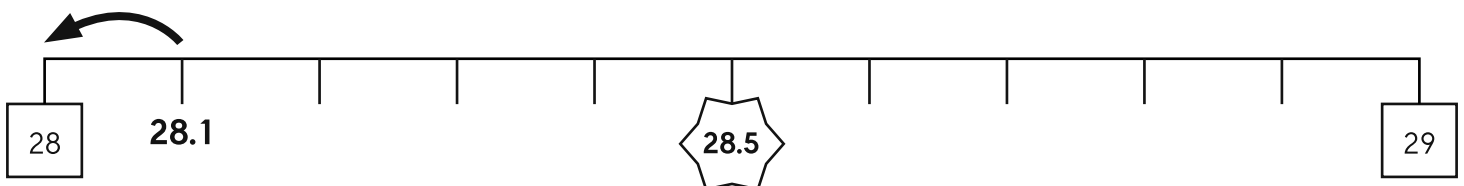
3. 57.2 rounded to the nearest whole number is



4. 84.4 rounded to the nearest whole number is

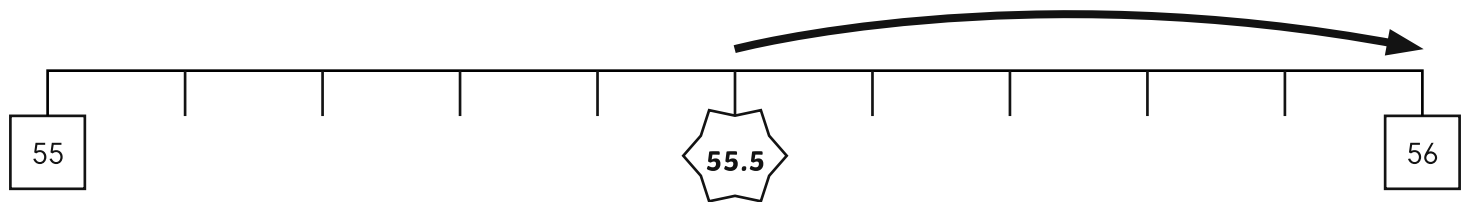


5. 28.1 rounded to the nearest whole number is







6. 55.5 rounded to the nearest whole number is **56**



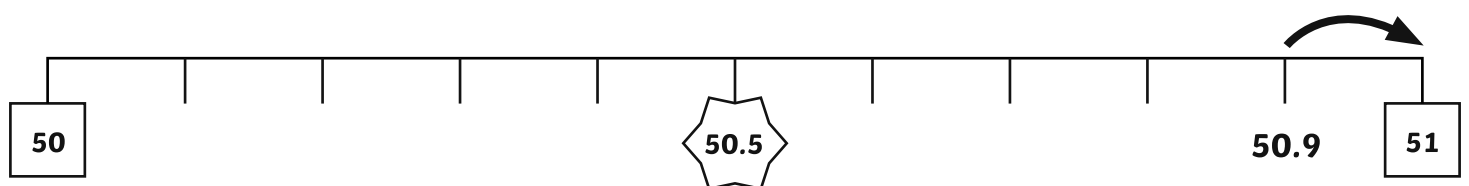
7. 16.3 rounded to the nearest whole number is **16**



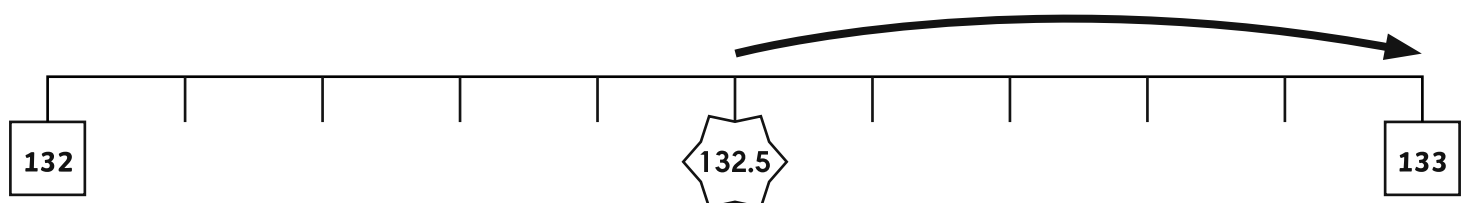
8. 99.7 rounded to the nearest whole number is **100**



9. 50.9 rounded to the nearest whole number is **51**



10. 132.5 rounded to the nearest whole number is **133**





# Rounding Decimals

Round each number to the nearest whole number.

- 0.8 rounded to the nearest whole number is
- 13.6 rounded to the nearest whole number is
- 57.2 rounded to the nearest whole number is
- 84.4 rounded to the nearest whole number is
- 28.1 rounded to the nearest whole number is
- 55.5 rounded to the nearest whole number is
- 16.3 rounded to the nearest whole number is
- 99.7 rounded to the nearest whole number is
- 50.9 rounded to the nearest whole number is
- 132.5 rounded to the nearest whole number is

Use your answers above to complete the next section. Can you give 2 other numbers which would round to the same whole number for each question?

- |                         |                          |
|-------------------------|--------------------------|
| 1. <input type="text"/> | 6. <input type="text"/>  |
| 2. <input type="text"/> | 7. <input type="text"/>  |
| 3. <input type="text"/> | 8. <input type="text"/>  |
| 4. <input type="text"/> | 9. <input type="text"/>  |
| 5. <input type="text"/> | 10. <input type="text"/> |



# Rounding Decimals Answers

Round each number to the nearest whole number.

- 0.8 rounded to the nearest whole number is **1**
- 13.6 rounded to the nearest whole number is **14**
- 57.2 rounded to the nearest whole number is **57**
- 84.4 rounded to the nearest whole number is **84**
- 28.1 rounded to the nearest whole number is **28**
- 55.5 rounded to the nearest whole number is **56**
- 16.3 rounded to the nearest whole number is **16**
- 99.7 rounded to the nearest whole number is **100**
- 50.9 rounded to the nearest whole number is **51**
- 132.5 rounded to the nearest whole number is **133**

Use your answers above to complete the next section. Can you give 2 other numbers which would round to the same whole number for each question?

- Any 2 of: 0.5, 0.6, 0.7, 0.9, 1.1, 1.2, 1.3, 1.4**
- Any 2 of: 13.5, 13.7, 13.8, 13.9, 14.1, 14.2, 14.3, 14.4**
- Any 2 of: 56.5, 56.6, 56.7, 56.8, 56.9, 57.1, 57.3, 57.4**
- Any 2 of: 83.5, 83.6, 83.7, 83.8, 83.9, 84.1, 84.2, 84.3**
- Any 2 of: 27.5, 27.6, 27.7, 27.8, 27.9, 28.2, 28.3, 28.4**
- Any 2 of: 55.6, 55.7, 55.8, 55.9, 56.1, 56.2, 56.3, 56.4**
- Any 2 of: 15.5, 15.6, 15.7, 15.8, 15.9, 16.1, 16.2, 16.4**
- Any 2 of: 99.5, 99.6, 99.8, 99.9, 100.1, 100.2, 100.3,**
- Any 2 of: 50.5, 50.6, 50.7, 50.8, 51.1, 51.2, 51.3, 51.4**
- Any 2 of: 132.6, 132.7, 132.8, 132.9, 133.1, 133.2, 133.3,**