



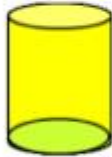



Can you write the name of the 3d shape in your maths home learning book and list the properties next to the name?

	Shape	Properties
1.	Name of shape: _____ 	Faces: Edges: Vertices:
2.	Name of shape: _____ 	Faces: Edges: Vertices:
3.	Name of shape: _____ 	Faces: Edges: Vertices:
4.	Name of shape: _____ 	Faces: Edges: Vertices:
5.	Name of shape: _____ 	Faces: Edges: Vertices:
6.	Name of shape: _____ 	Faces: Edges: Vertices:

Answers

1. Cube: 6 faces, 12 edges, 8 vertices
2. Cuboid: 6 faces, 12 edges, 8 vertices
3. Square based pyramid: 5 faces, 8 edges, 5 vertices
4. Cone: 2 faces, 1 edge, 1 vertices
5. Cylinder: 3 faces, 2 edges, 0 vertices
6. Sphere: 1 face, 0 edge, 0 vertices